






Was fällt dir jetzt auf?



Anweisung
Rechne aus.






Dividiere immer durch 	400, 280, 160, 120	$400 : 40 = \underline{\hspace{2cm}}$ $280 : 40 = \underline{\hspace{2cm}}$ $160 : 40 = \underline{\hspace{2cm}}$ $120 : 40 = \underline{\hspace{2cm}}$
Dividiere immer durch 	600, 420, 300, 240	$600 : 60 = \underline{\hspace{2cm}}$ $420 : 60 = \underline{\hspace{2cm}}$ $300 : 60 = \underline{\hspace{2cm}}$ $240 : 60 = \underline{\hspace{2cm}}$
Dividiere immer durch 	800, 560, 400, 320	$800 : 80 = \underline{\hspace{2cm}}$ $560 : 80 = \underline{\hspace{2cm}}$ $400 : 80 = \underline{\hspace{2cm}}$ $320 : 80 = \underline{\hspace{2cm}}$
Dividiere immer durch 	700, 490, 350, 140	$700 : 70 = \underline{\hspace{2cm}}$ $490 : 70 = \underline{\hspace{2cm}}$ $350 : 70 = \underline{\hspace{2cm}}$ $140 : 70 = \underline{\hspace{2cm}}$
Dividiere immer durch 	300, 240, 180, 120	$300 : 30 = \underline{\hspace{2cm}}$ $240 : 30 = \underline{\hspace{2cm}}$ $180 : 30 = \underline{\hspace{2cm}}$ $120 : 30 = \underline{\hspace{2cm}}$

Lösung

Was fällt dir jetzt auf?



Anweisung
Rechne aus.

Dividiere immer durch 	400, 280, 160, 120	$400 : 40 = 10$ $280 : 40 = 7$ $160 : 40 = 4$ $120 : 40 = 3$
Dividiere immer durch 	600, 420, 300, 240	$600 : 60 = 10$ $420 : 60 = 7$ $300 : 60 = 5$ $240 : 60 = 4$
Dividiere immer durch 	800, 560, 400, 320	$800 : 80 = 10$ $560 : 80 = 7$ $400 : 80 = 5$ $320 : 80 = 4$
Dividiere immer durch 	700, 490, 350, 140	$700 : 70 = 10$ $490 : 70 = 7$ $350 : 70 = 5$ $140 : 70 = 2$
Dividiere immer durch 	300, 240, 180, 120	$300 : 30 = 10$ $240 : 30 = 8$ $180 : 30 = 6$ $120 : 30 = 4$